



Objectif : Je sais lire les heures justes, les demi-heures et les quarts d'heure.


1. Écris les heures indiquées sur ces horloges.




Il est h min.




Il est h min.




Il est h min.




Il est h min.




Il est



Il est

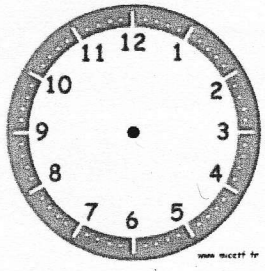


Il est

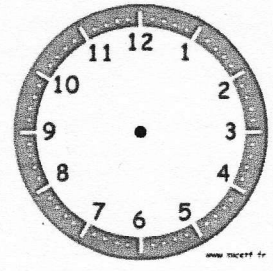


Il est


2. Place les aiguilles selon les heures indiquées.




Il est 10 h 00 min.



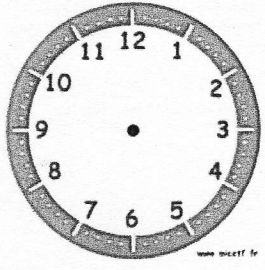
Il est 3 h 30 min.



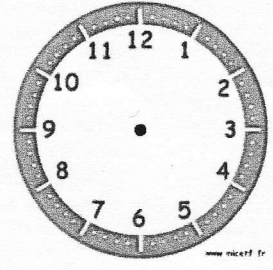
Il est 1 h 00 min.



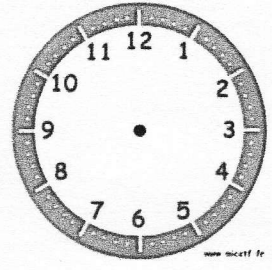
Il est 4 h 15 min.



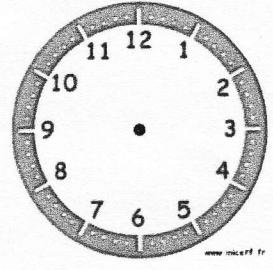
Il est 12 h et demie.



Il est 6 h et quart.



Il est 11 h et quart.



Il est 9 h 30 min.